


Enrichment Worksheet –
Syncopation

Credit
toward
Worksheet



Name: _____

Folder Slot: _____ Band: _____

1. Put the correct counts below the diagram:

2. When a dotted quarter note is placed OFF the beat it receives _____ down beat(s) and _____ up beat(s).

3. Put the correct counts below the diagram:

4. *Circle One*

The first eighth note is ON / OFF the beat.
The first quarter note is ON / OFF the beat.
The second eighth note is ON / OFF the beat.

5. Circle measures that have syncopation in them.

a.

b.

c.

d.

6. In the following lines, please do the following:

- Write the counts below the exercises
- Underline counts that apply to notes that are more than one beat long. *Please underline the counts below quarter notes in syncopated rhythms*
- Draw arrows above notes indicating where your foot is while it is being played. *Dotted quarter notes must have three arrows. Syncopated rhythms must have two arrows above quarter notes.*

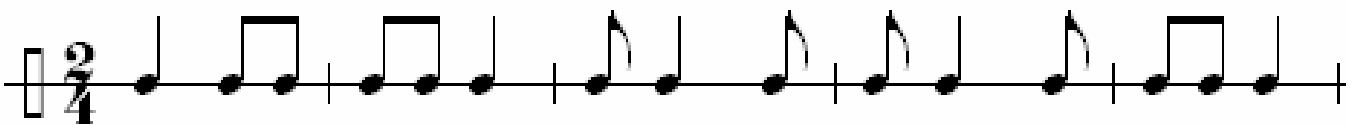
a.



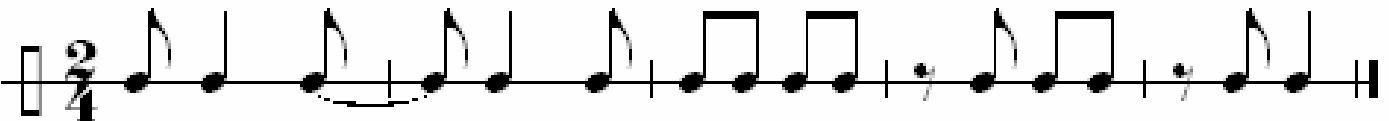
b.



c.



d.



e.



7. Describe syncopation in the lines below.
